
	INDIAN SCHOOL MUSCAT MIDDLE SECTION DEPARTMENT OF SOCIAL SCIENCE MAPS	
---	--	---

NAME: _____ CLASS VI SEC: _____ ROLL NO: _____ DATE: _____ /09/2018

S.NO

I

FILL IN THE BLANKS:

MARKS

11

- a. A _____ is a representation or drawing of the earth's surface or a part of it drawn on a flat surface according to _____.
- b. When many maps are put together we get an _____.
- c. The three _____ of Maps are –distance, direction and symbol.
- d. The arrow marked 'N' at the upper right hand corner of a map showing north direction is called the _____.
- e. A plan is a drawing of a _____ area on a _____ scale.
- f. The magnetic needle of the Compass always points towards _____ direction.
- g. Maps have a universal _____ that can be understood by all.
- h. A _____ is a _____ mainly based on memory and spot observation and not to scale.

II

ANSWER IN 'ONE/TWO' WORD/WORDS:

6

- a. The four major directions – North, South, East and West are called.

- b. This is necessary for a map. _____
- c. A drawing drawn to scale is called. _____
- d. We can find the direction of a place with the help of a.

- e. The blue colour in maps is used for showing.

- f. The ratio between the actual distance on the ground and the distance shown on the map. _____

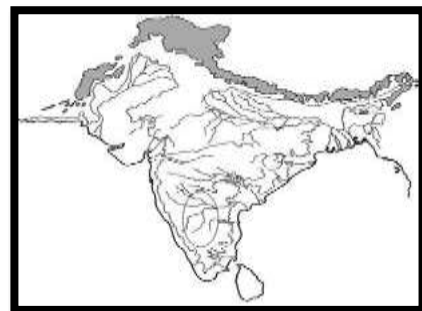
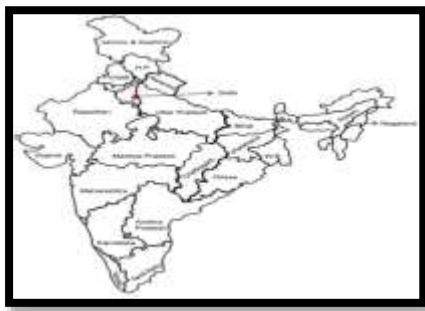
III ANSWER THE FOLLOWING QUESTIONS IN 'TWO' POINTS:

- | | | |
|----|---|---|
| 1. | Distinguish between a large scale map and a small scale map. | 2 |
| 2. | What do you understand by Conventional Symbols? | 2 |
| 3. | State the importance of intermediate directions shown on a map. | 2 |
| 4. | Comment on: A Sketch Map | 2 |

IV ANSWER THE FOLLOWING QUESTION IN 'FOUR' POINTS:

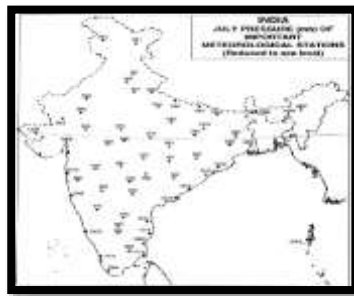
- | | | |
|----|--|---|
| 5. | Explain the three different types of Map. State any one way how map is more useful than a globe. | 4 |
|----|--|---|

V. IDENTIFY THE FOLLOWING MAPS:



3

a. _____ b. _____



c. _____

VI. DRAW THE FOLLOWING CONVENTIONAL SYMBOLS IN THE NOTE BOOK.

10

A. Railway Station	E. Metalled Road	H. Unmetalled Road
B. River	F. Bridge	I. Post Office
C. Police Station	G. Settlement	J. International Boundary
D. State Boundary		

